

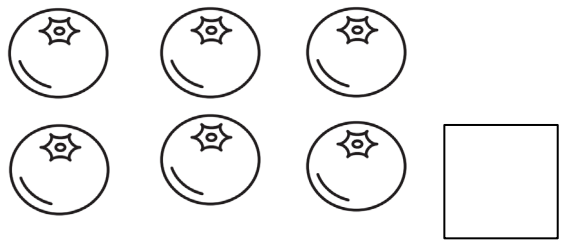



Maths My Way Senior Infants: Autumn Assessment

This assessment is designed to assess the learning foci covered in *Maths My Way* Senior Infants Units 1–8.

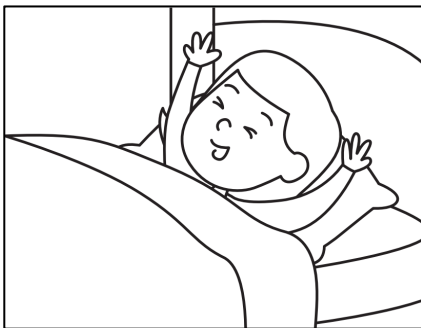
Assessment Record	<p>Section A</p> <p>1. Number: Numeration and Counting Count sets to 10.</p> <p>2. Measures: Time Sequence and order events in terms of first, next, then.</p> <p>3. Number: Numeration and Counting Count forward from different numbers, within 10.</p>	<p>Section B</p> <p>1. Shape and Space: Shape Identify and recognise 2D shapes.</p> <p>2. Algebra: Patterns, Rules and Relationships Create an ABC pattern using colour.</p> <p>3. Number: Uses of Number Understand ordinal numbers.</p>	<p>Section C</p> <p>1. Number: Numeration and Counting Count and make sets up to 10 on a 10 frame.</p>	<p>Section D</p> <p>1. Data and Chance: Data Create a block graph.</p>
Student				
1.				
2.				
3.				
4.				
5.				
6.				
7.				
8.				
9.				
10.				
11.				
12.				
13.				
14.				
15.				
16.				
17.				
18.				
19.				
20.				
21.				
22.				
23.				
24.				
25.				

Section A:


1. Count each set. Write the correct number.



2. What comes after? Draw.



first

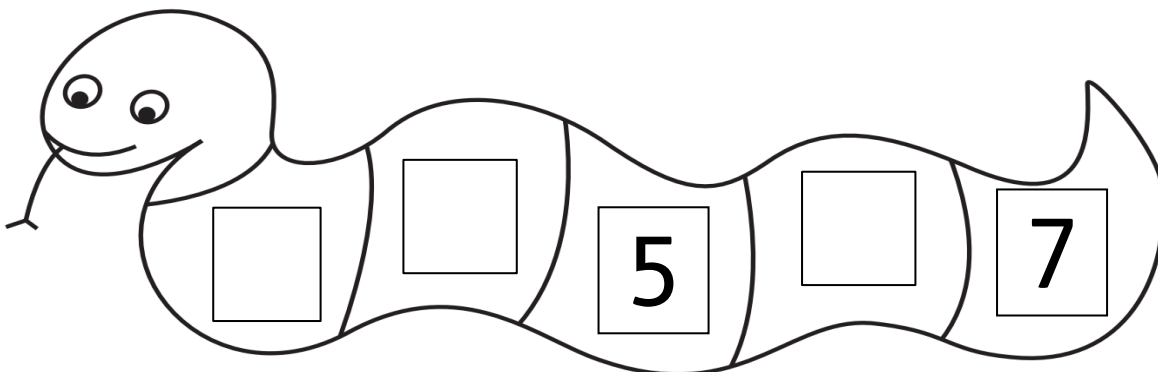


next



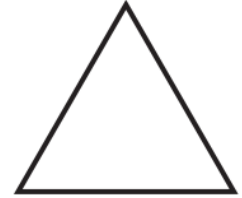


then

3. Fill in the missing numbers.



Section B:

1. Match the shapes with their names.




●
circle

●
triangle


●
square

●
rectangle

2. Use 3 colours to create a pattern.



3. Colour the 1st blue, the 2nd red and the 3rd pink.



Section C:

I. Draw the correct number of counters in each 10 frame.

6					

4					

2					

8					

7					

9					

5					

3					



1					

10					

/ 10

Section D:

A. Count the animals and make a block graph.



Scoring Guidelines:

Section A	Question 1	___ of 4 points
	Question 2	___ of 1 points
	Question 3	___ of 3 points

Section B	Question 1	___ of 4 points
	Question 2	___ of 1 points
	Question 3	___ of 3 points

Section C	Question 1	___ of 10 points
------------------	------------	------------------

Section D	Question 1	___ of 4 points
------------------	------------	-----------------

Section	A	B	C	D	Final Score
Score	$\frac{\quad}{8}$	$\frac{\quad}{8}$	$\frac{\quad}{10}$	$\frac{\quad}{4}$	$\frac{\quad}{30} = \frac{\quad}{\quad} \%$